

## Types of Reactions Worksheet

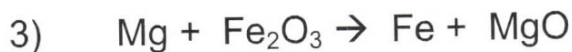
Indicate the type of reaction taking place:



Reaction type: \_\_\_\_\_



Reaction type: \_\_\_\_\_



Reaction type: \_\_\_\_\_



Reaction type: \_\_\_\_\_



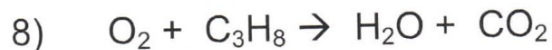
Reaction type: \_\_\_\_\_




Reaction type: \_\_\_\_\_



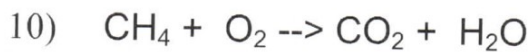
Reaction type: \_\_\_\_\_



Reaction type: \_\_\_\_\_



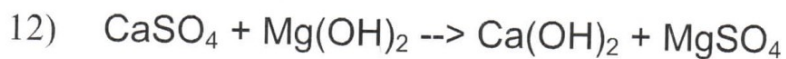
Reaction type: \_\_\_\_\_



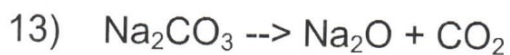
Reaction type: \_\_\_\_\_



Reaction type: \_\_\_\_\_



Reaction type: \_\_\_\_\_



Reaction type: \_\_\_\_\_



Reaction type: \_\_\_\_\_